

ГРУПА А

УЧАСТНИК №

28.03.2026 г.

СЪСТЕЗАНИЕ ПО МАТЕМАТИКА

Решавай ДРУЖБА!


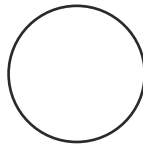
за деца от ПГ - 6 г. (IV група)

1. ЗАДАЧА (3 точки)

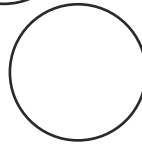
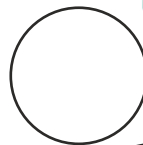


1


2



5



8



2. ЗАДАЧА (6 точки)

$$4 \square 6$$

$$9 \square 3$$

$$5 - 1 \square 8$$

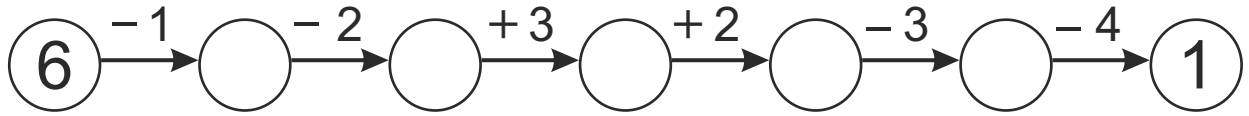
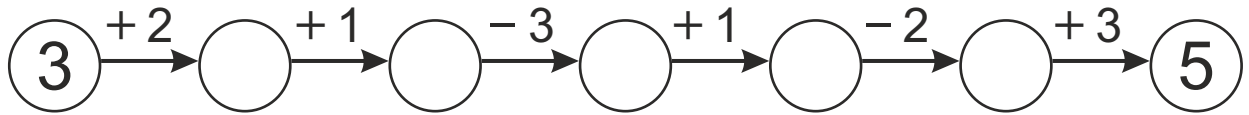

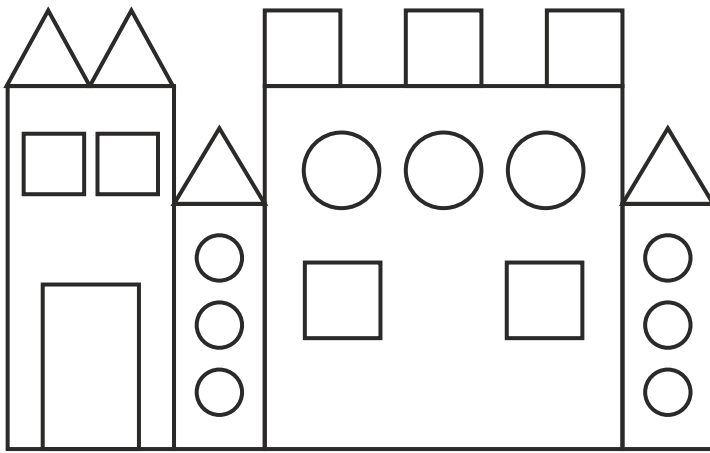
$$3 + 2 \square 4$$

$$6 - 4 \square 3 - 1$$

$$3 + 3 \square 2 + 2 + 1$$

> < =



3.**ЗАДАЧА (5 точки)****4.****ЗАДАЧА (4 точки)**

$\square = \underline{\hspace{2cm}}$ $\triangle = \underline{\hspace{2cm}}$



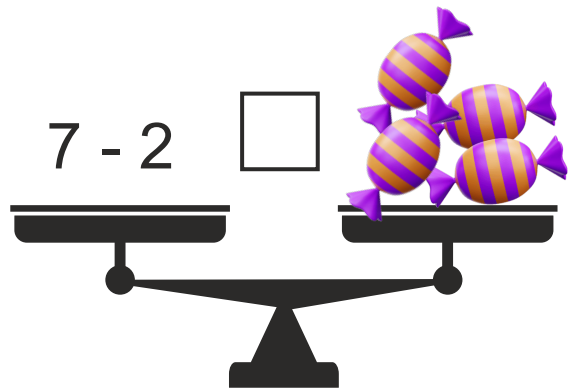

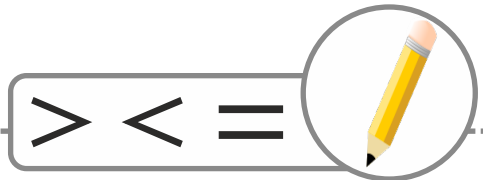
$\bigcirc = \underline{\hspace{2cm}}$ $\text{rectangle} = \underline{\hspace{2cm}}$

5.**ЗАДАЧА (5 точки)**

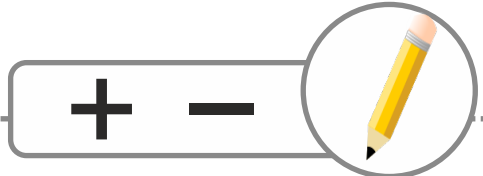
	А	Б	В	Г	Д	Е	Ж
1							
2							
3							
4							
5							
6							
7							

Е1

6. ЗАДАЧА (4 точки)



7. ЗАДАЧА (5 точки)



3 ○ 2 = 4 ○ 1

0 ○ 4 = 5 ○ 1

5 ○ 2 = 6 ○ 5 ○ 2

2 ○ 2 ○ 4 = 3 ○ 3



8. ЗАДАЧА (6 точки)

$4 - \text{😊} = 3$ $\text{😊} = 1$



 +  = 6

 = _____ 

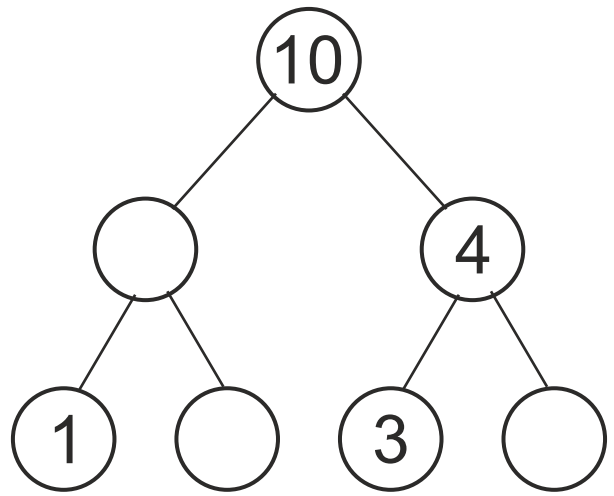
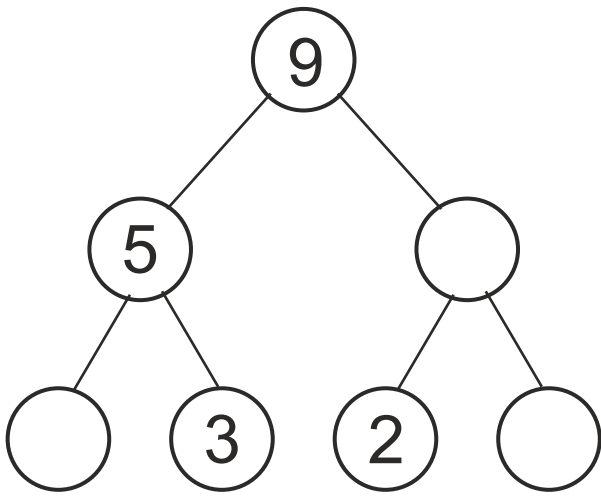

 +  = 5

 = _____ 

 -  = 4

 = _____ 

9. ЗАДАЧА (6 точки)



10. ЗАДАЧА (6 точки)

