

ГРУПА А

СЪСТЕЗАНИЕ ПО МАТЕМАТИКА



УЧАСТНИК № .....

01.05.2025 г.

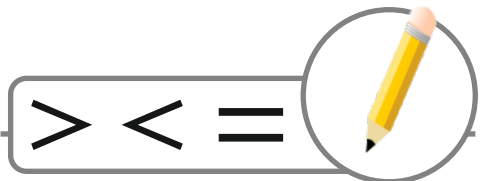
Решавай  
ДРУЖБА

за деца от ПГ - 6 г. (IV група)

1. ЗАДАЧА (4 точки)



2. ЗАДАЧА (6 точки)



$$6 \square 4$$

$$3 \square 10$$


$$9 - 0 \square 8$$

$$5 + 2 \square 6 + 3$$

$$8 - 4 \square 1 + 3$$

$$9 + 1 \square 2 + 6$$

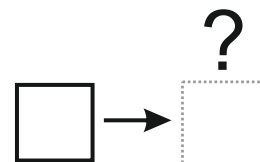
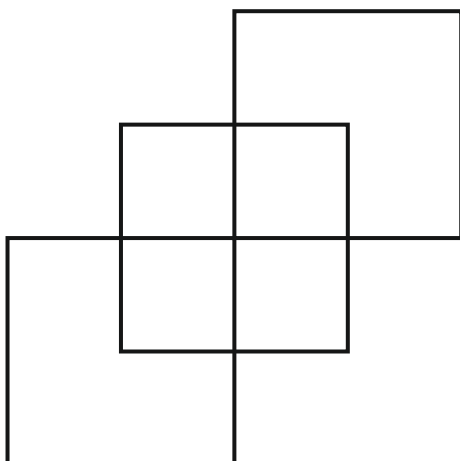
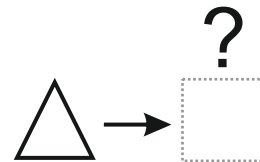
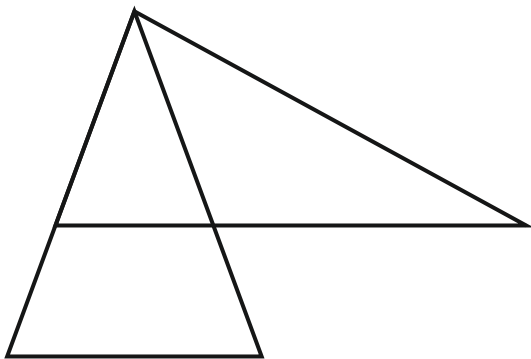

**3. ЗАДАЧА (6 точки)**



+	3	1	4
5			
4			
2			


-	5	6	3
9			
8			
7			

**4. ЗАДАЧА (6 точки)**



5.

ЗАДАЧА (5 точки)



	1	2	3	4	5	6	7
А							
Б							
В		○					
Г							
Д							
Е							

2, В : ○

5, А : △

4, Е : ×

5, Д : □

6, Б : #

7, Г : ⊙

6.

ЗАДАЧА (5 точки)



③ + □ = △<sub>7</sub>

◇ - □ = □

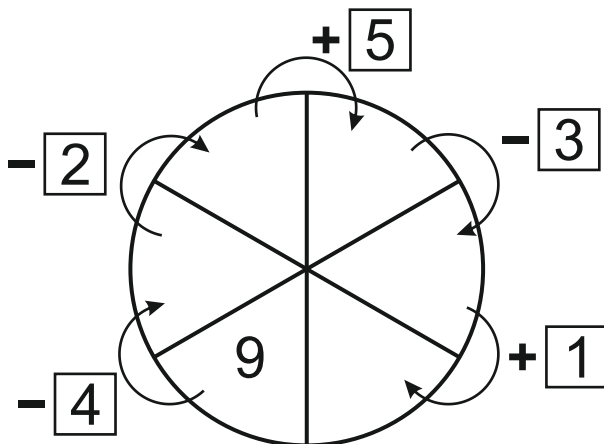
◊ + ○ = ◇

△ - ◊ = ⌋

⌋ = ?

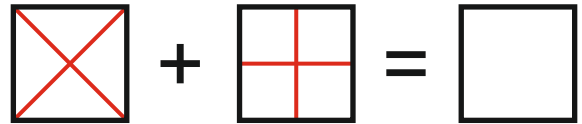

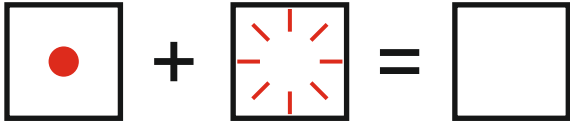
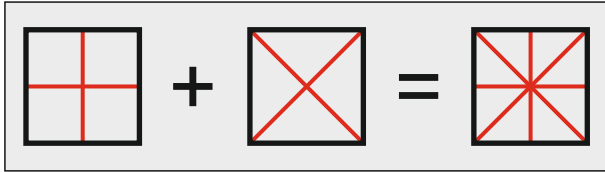
7.

ЗАДАЧА (5 точки)



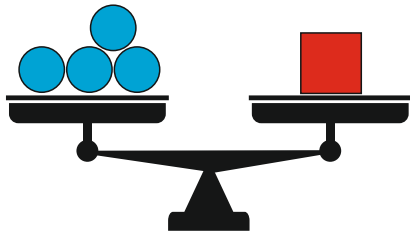

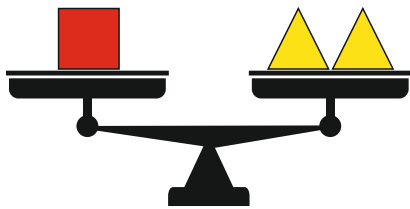

8.

ЗАДАЧА (4 ТОЧКИ)



9.

ЗАДАЧА (4 ТОЧКИ)



10.

ЗАДАЧА (5 ТОЧКИ)

