

ГРУПА Б

СЪСТЕЗАНИЕ ПО МАТЕМАТИКА

20.04.2024 г.


Решавай с ДРУЖБА!

за деца от ПГ - 6 г. (IV група)

УЧАСТНИК №

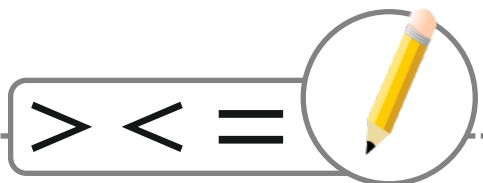
1.

ЗАДАЧА (4 точки)



2.

ЗАДАЧА (6 точки)



4	<input type="text"/>	5
---	----------------------	---

7	<input type="text"/>	6
---	----------------------	---

8	-	0	<input type="text"/>	9
---	---	---	----------------------	---


2	+	8	<input type="text"/>	3	+	5
---	---	---	----------------------	---	---	---

7	-	1	<input type="text"/>	1	+	4
---	---	---	----------------------	---	---	---

6	+	3	<input type="text"/>	4	+	5
---	---	---	----------------------	---	---	---

3.


ЗАДАЧА (4 точки)




5	+		=	8
-		-		-
	+	1	=	
=		=		=
1	+		=	3

4.

ЗАДАЧА (6 точки)



$$\bigcirc - \triangle + \square + \square = \square$$



$$\triangle \rightarrow \square$$


$$\bigcirc \rightarrow \square$$

$$\square \rightarrow \square$$

$$\square \rightarrow \square$$

5.

ЗАДАЧА (5 точки)



	1	2	3	4	5	6	7
А							
Б							
В							
Г							
Д							
Е							

: 1, Г

: _____, _____

: _____, _____



: _____, _____

: _____, _____

: _____, _____

6.

ЗАДАЧА (5 точки)



- =

- =


+ =

+ =

- =

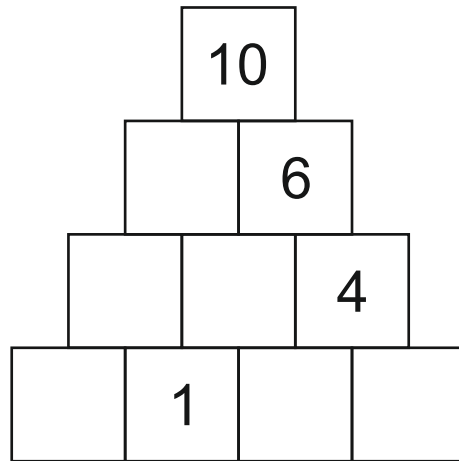


7.

ЗАДАЧА (4 точки)



= 1

=

8.**ЗАДАЧА (3 точки)****9.****ЗАДАЧА (5 точки)****10.****ЗАДАЧА (6 точки)**