

ГРУПА А

СЪСТЕЗАНИЕ ПО МАТЕМАТИКА



20.04.2024 г.

Решавай с ДРУЖБА!

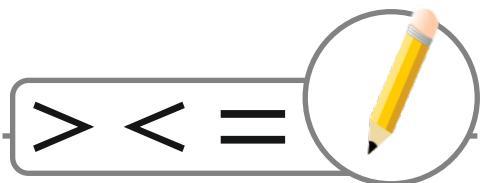
за деца от ПГ - 6 г. (IV група)

УЧАСТНИК №

1. ЗАДАЧА (4 точки)



2. ЗАДАЧА (6 точки)



5		3
---	--	---

4		9
---	--	---

8	-	0		7
---	---	---	--	---


2	+	6		3	+	5
---	---	---	--	---	---	---

7	-	5		1	+	4
---	---	---	--	---	---	---

6	+	2		4	+	5
---	---	---	--	---	---	---

3.


ЗАДАЧА (4 точки)




4	+		=	7
-		-		-
	+	1	=	
=		=		=
3	+		=	5

4.

ЗАДАЧА (6 точки)



$$\bigcirc - \triangle + \square - \square = \square$$



$$\triangle \rightarrow \square$$


$$\bigcirc \rightarrow \square$$

$$\square \rightarrow \square$$

$$\square \rightarrow \square$$

5.

ЗАДАЧА (5 точки)



	1	2	3	4	5	6	7
А							
Б							
В							
Г							
Д							
Е							

: 1, Г

: _____, _____

: _____, _____


: _____, _____

: _____, _____

: _____, _____

6.

ЗАДАЧА (5 точки)



- =

- =


+ =

+ =

- =

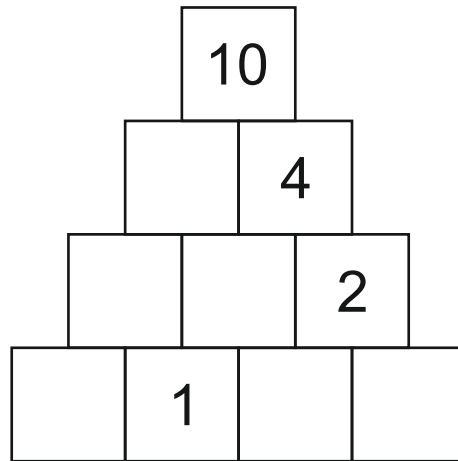


7.

ЗАДАЧА (4 точки)




= 1

=

8.**ЗАДАЧА (3 точки)****9.****ЗАДАЧА (5 точки)**

- а) б) в) г)

10.**ЗАДАЧА (6 точки)**

$$\begin{array}{|c|c|} \hline & \\ \hline & \\ \hline \end{array} + \begin{array}{|c|c|} \hline & \\ \hline & \\ \hline \end{array} = ?$$

- а) б) в)

$$\begin{array}{|c|c|} \hline \diagup & \diagdown \\ \hline & \\ \hline \end{array} - \begin{array}{|c|c|} \hline & \\ \hline & \\ \hline \end{array} = ?$$

- а) б) в)