

ГРУПА Б

СЪСТЕЗАНИЕ ПО МАТЕМАТИКА

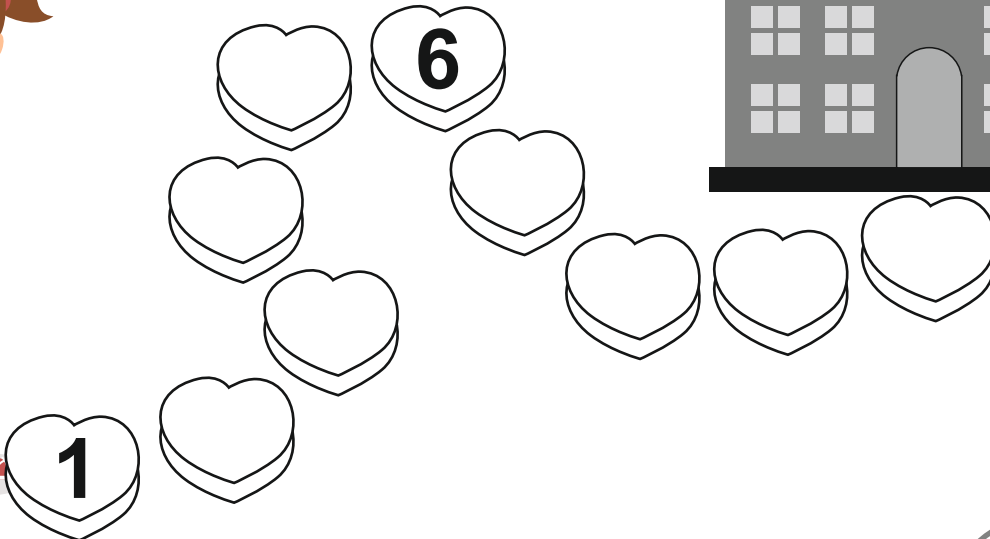
УЧАСТНИК №

12.03.2023 г.

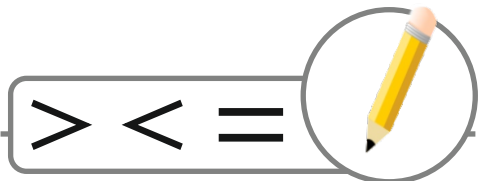
Решавай
ДРУЖБА

за деца от ПГ - 6 г. (IV група)

1. ЗАДАЧА (4 точки)



2. ЗАДАЧА (6 точки)



$5 \square 2$

$6 \square 8$

$7 - 0 \square 4$

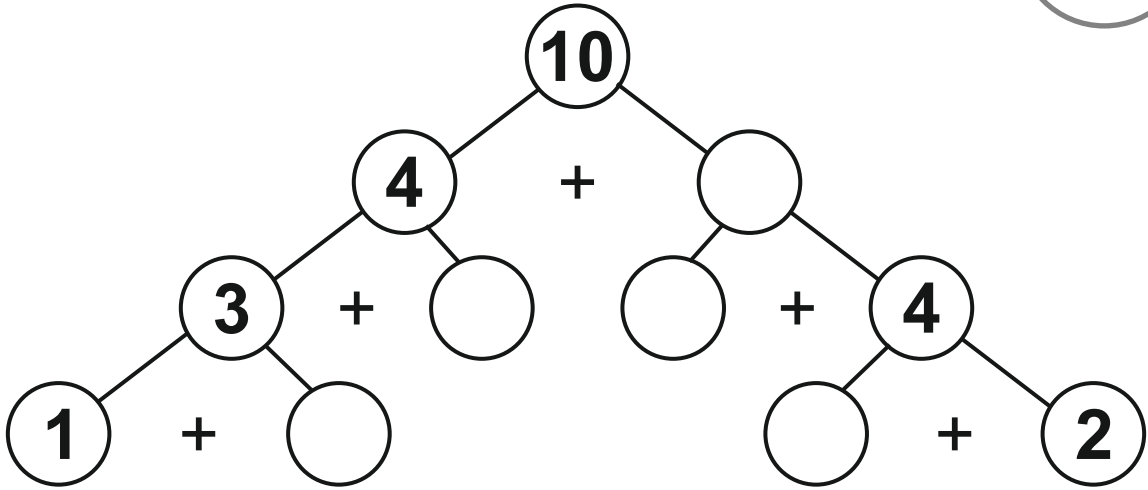

$3 + 4 \square 2 + 3$

$9 - 3 \square 1 + 4$

$6 + 3 \square 5 + 4$



3.

ЗАДАЧА (5 точки)



4.


ЗАДАЧА (6 точки)



$$\square - \square + \bigcirc - \triangle = \square$$



$$\square \rightarrow \square$$






$$\square \rightarrow \square$$




$$\bigcirc \rightarrow \square$$

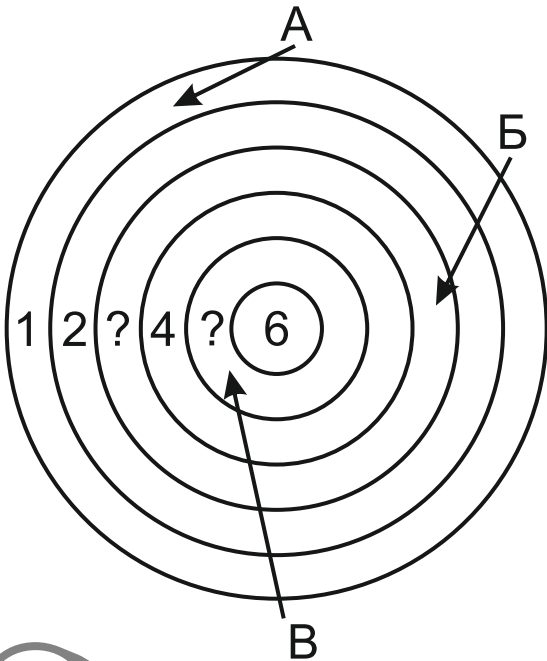



$$\triangle \rightarrow \square$$




5.**ЗАДАЧА (5 точки)**

	А	Б	В	Г	Д
1					
2					
3					
4					
5					

Г2 - \triangle А1 - \bigcirc В5 - \star Б4 - \square Д3 - \square **6.****ЗАДАЧА (4 точки)**

$$\begin{array}{c} \text{А} \\ \swarrow \end{array} + \begin{array}{c} \text{Б} \\ \swarrow \end{array} + \begin{array}{c} \text{В} \\ \swarrow \end{array} = \square$$

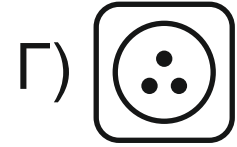
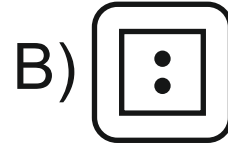
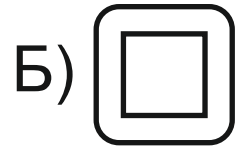
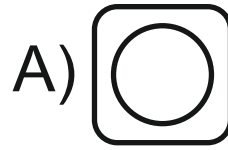


7.**ЗАДАЧА (4 точки)**

$$\text{Cabbage} = \square$$



8.

ЗАДАЧА (4 точки)

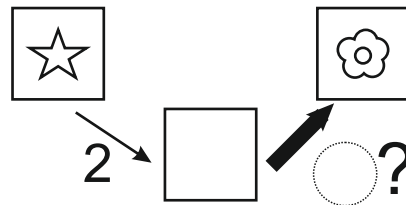
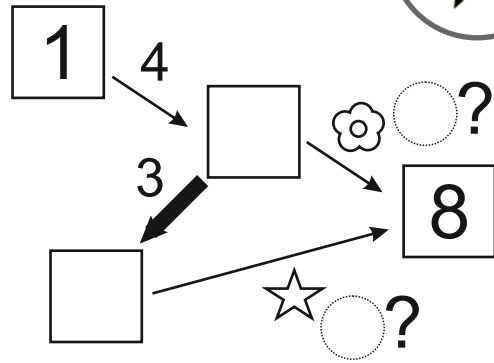
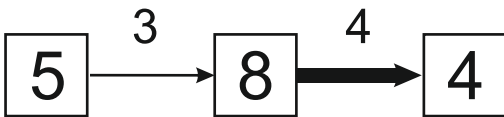


9.

ЗАДАЧА (6 точки)



образец



10.

ЗАДАЧА (6 точки)



+ 1 =

=

+ = 6 - 2 + 5 - 1

=

+ + =