

ГРУПА А

СЪСТЕЗАНИЕ ПО МАТЕМАТИКА

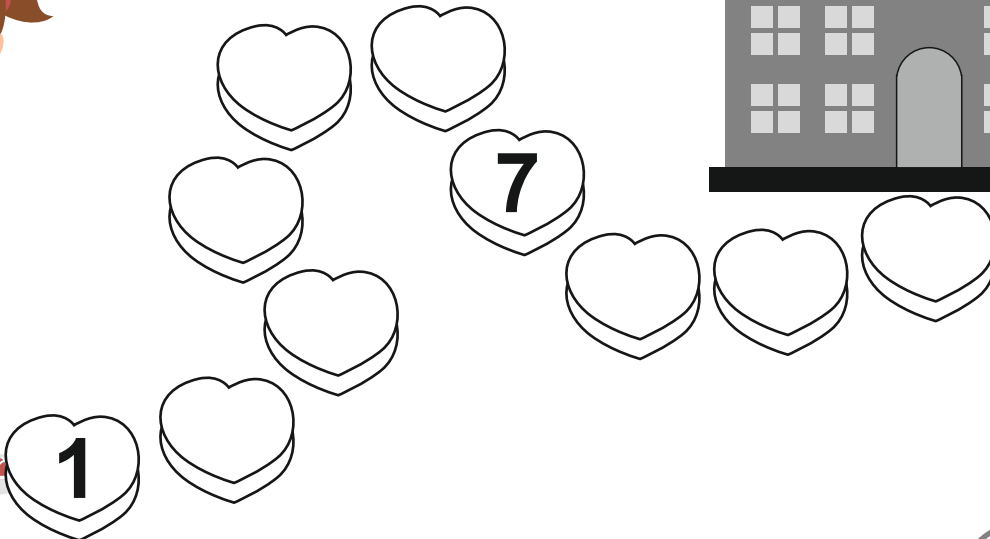
12.03.2023 г.

Решавай ДРУЖБА!

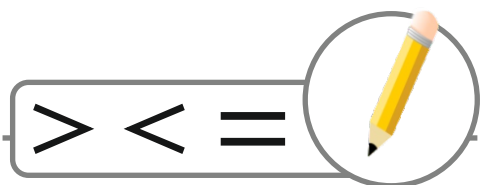
за деца от ПГ - 6 г. (IV група)

УЧАСТНИК №

1. ЗАДАЧА (4 точки)



2. ЗАДАЧА (6 точки)



$3 \square 4$

$9 \square 7$

$5 - 0 \square 7$

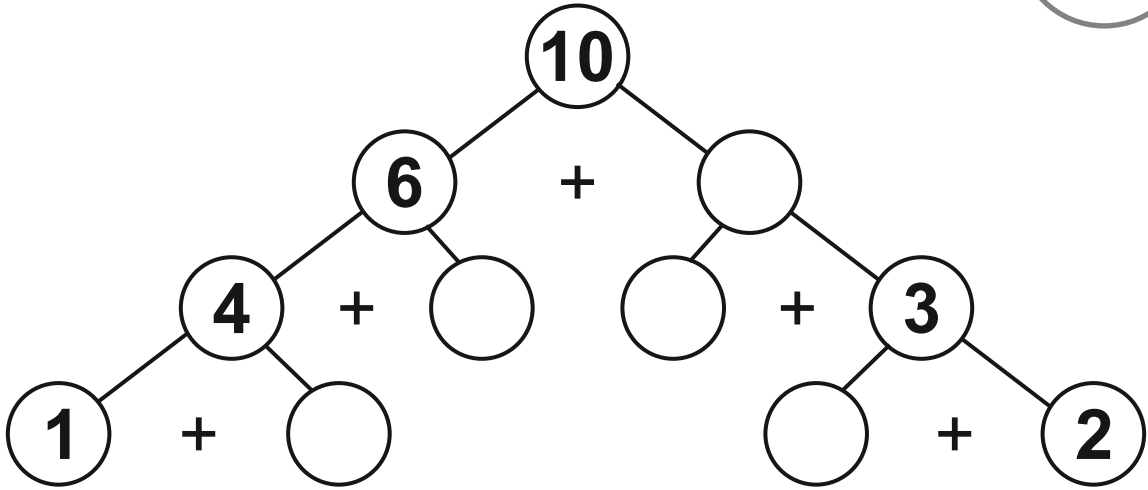

$3 + 4 \square 2 + 5$

$9 - 6 \square 1 + 4$

$6 + 3 \square 5 + 5$


3.

ЗАДАЧА (5 точки)



4.

ЗАДАЧА (6 точки)




$\triangle - \bigcirc + \square - \square = \square$

$\triangle \rightarrow \square$

$\bigcirc \rightarrow \square$

$\square \rightarrow \square$

$\square \rightarrow \square$

5.**ЗАДАЧА (5 точки)**

	А	Б	В	Г	Д
1					
2					
3					
4					
5					

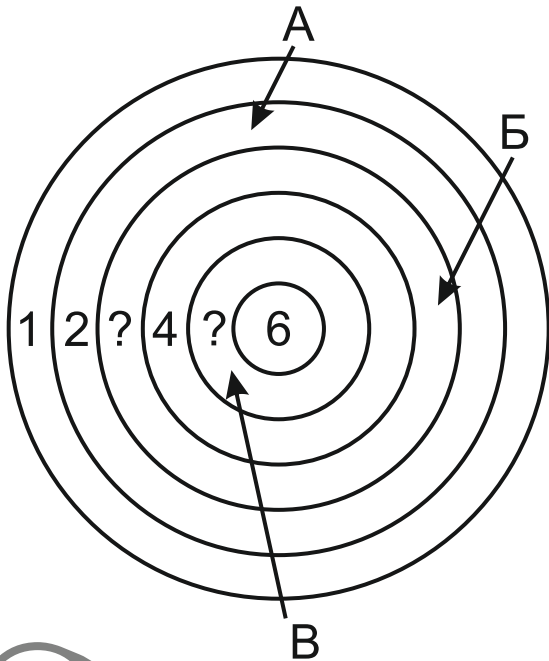

Г2 - ☆

А1 - □


В5 - △

Б4 - ○

Д3 - □

6.**ЗАДАЧА (4 точки)**

$$\begin{array}{c} \text{А} \\ \swarrow \end{array} + \begin{array}{c} \text{Б} \\ \swarrow \end{array} + \begin{array}{c} \text{В} \\ \swarrow \end{array} = \square$$

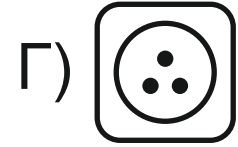
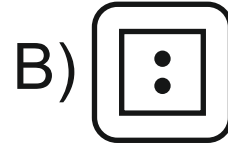
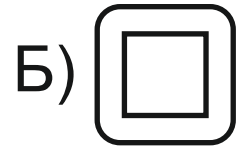
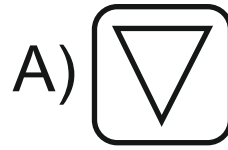


7.**ЗАДАЧА (4 точки)**

$$\text{Cabbage} = \square$$



8.

ЗАДАЧА (4 точки)

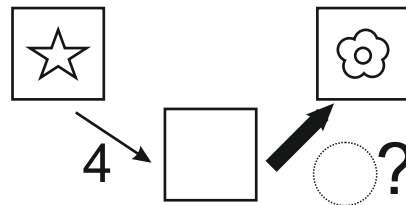
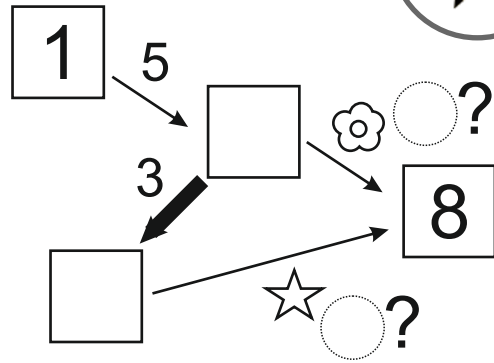
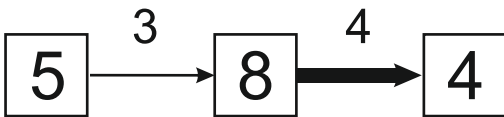


9.

ЗАДАЧА (6 точки)



образец



10.

ЗАДАЧА (6 точки)



+ 1 =

= ?
□

+ = 5 - 3 + 8 - 4

= ?
□

+ + = ?
□