


2

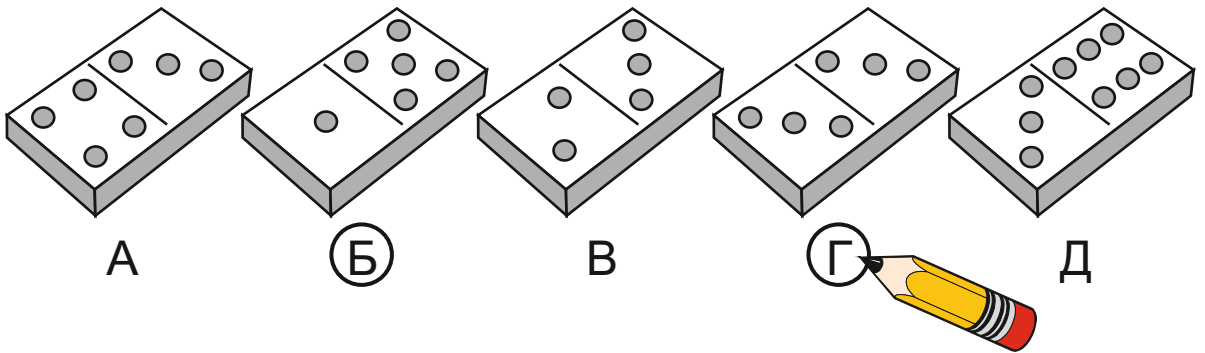
ЗАДАЧА (3 т.)



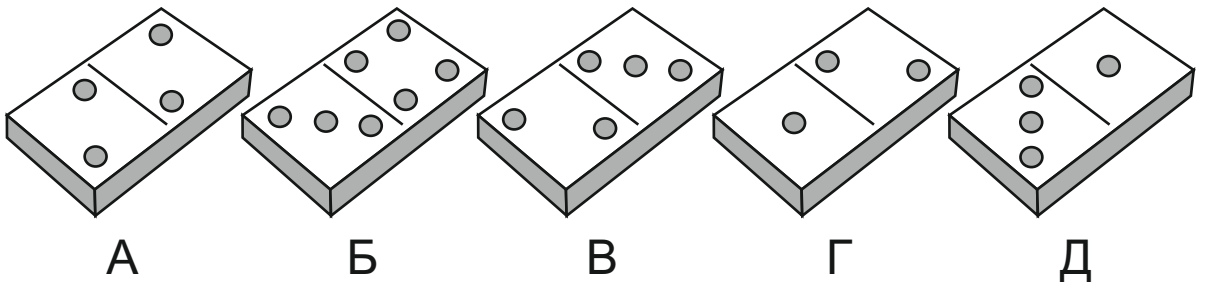
3

ЗАДАЧА (6 т.)

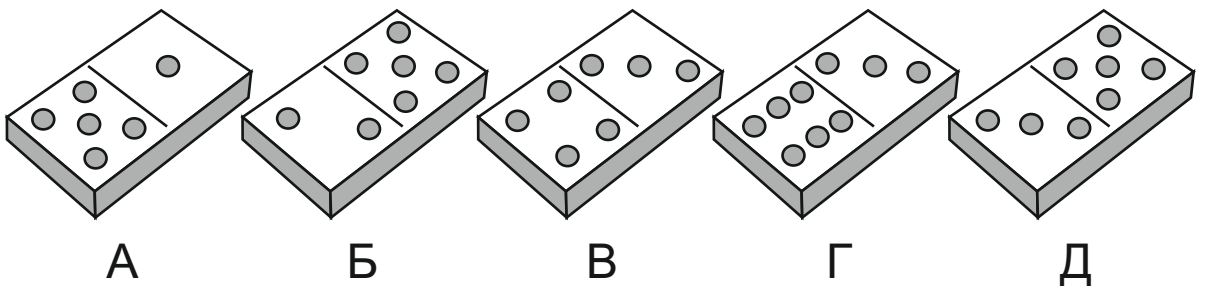
6



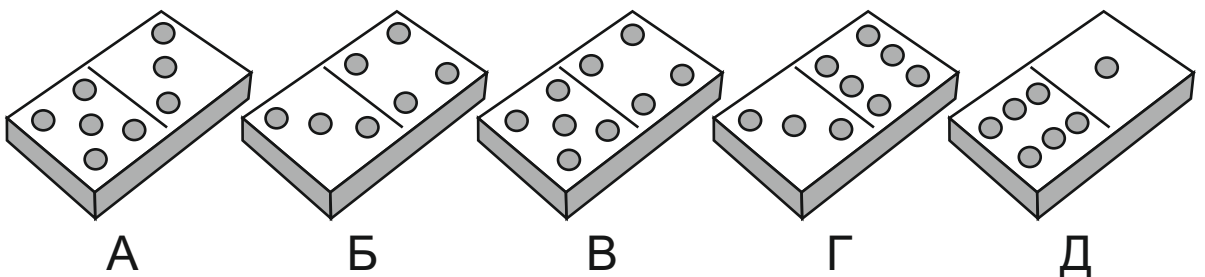
4



7




9



4

ЗАДАЧА (6 т.)




1 2 3 4
5 6 7 8 9



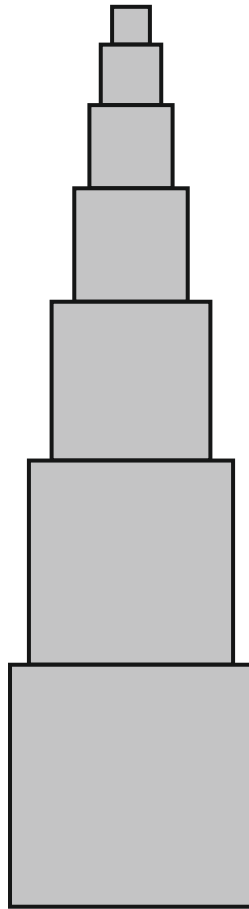
1 2 3 4
5 6 7 8 9




1 2 3 4
5 6 7 8 9





1 2 3 4
5 6 7 8 9



1 2 3 4
5 6 7 8 9




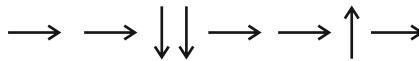
1 2 3 4
5 6 7 8 9



1 2 3 4
5 6 7 8 9

5

ЗАДАЧА (5 т.)





ЗАДАЧА (6 т.)

+ -

$$\boxed{4} + \boxed{2} = \boxed{}$$

$$\boxed{7} - \boxed{5} = \boxed{}$$

$$\boxed{6} + \boxed{} = \boxed{9}$$

$$\boxed{} - \boxed{2} = \boxed{5}$$

$$\boxed{} - \boxed{3} = \boxed{3} + \boxed{3}$$

$$\boxed{4} + \boxed{} = \boxed{8} - \boxed{4}$$



ЗАДАЧА (6 т.)

> < =

$$\boxed{9} \boxed{} \boxed{3}$$



$$\boxed{2} \boxed{} \boxed{7}$$

$$\boxed{3} + \boxed{3} \boxed{} \boxed{8}$$


$$\boxed{6} - \boxed{4} \boxed{} \boxed{1}$$

$$\boxed{1} + \boxed{5} \boxed{} \boxed{2} + \boxed{4}$$

$$\boxed{9} - \boxed{5} \boxed{} \boxed{3} + \boxed{1}$$




A1 **Б3** Б4
B2 B3 Г2



5

A3 Б2 B1
B2 B3 Г2



1

A2 A4 Б2
B2 B3 Г3



6

A1 Б1 Б2
Б3 B1 Г2



2

A3 A4 Б1
B3 Г3 Г4



7

A1 A2 Б2
Б4 B2 Г1



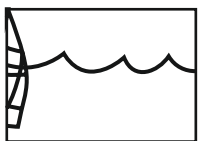
3

A1 Б3 B2
B3 Г2 Г3




8

A4 Б3 B3
B4 Г3 Г4



4

A2 Б1 B3
Г1 Г2 Г3



9

A3 A4 Б3
Б4 B3 Г4